

14/09/21

LO: to be able to count to 10.

P

CT

Must: Touch count in the correct order 0-10.


Should: Use correct the correct numerals.

Could: count objects correctly and sort objects into catergorized groups.

0 1 2 3 4 5 6 7 8 9 10

1 How many of each coloured cubes are there?

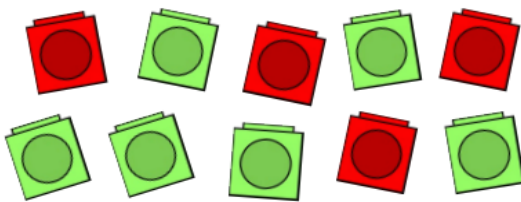
a



There are _____ orange cubes.

There are _____ purple cubes.

b



There are _____ red cubes.

There are _____ green cubes.

2 Complete the sentences or colour the objects to show the correct amount.

a




There are _____ yellow balloons.

There are _____ green balloons.

There are _____ blue balloons.

b




There are _____ 3 _____ pink doughnuts.

There are _____ 2 _____ brown doughnuts.

There are _____ 4 _____ blue doughnuts.

c



There are _____ blue pencils.

There are _____ yellow pencils.

There are _____ red pencils.