

05/10/20

LO: to order three groups of objects by size.

P		CT
	Must: Touch count objects.	
	Should: Use 'greatest' and 'smallest' to compare 3 groups.	
	Could: order groups by size from smallest to greatest.	

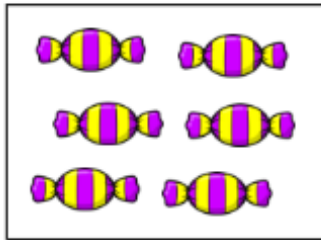


greatest

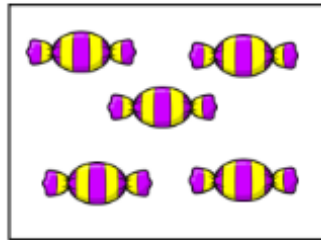


smallest

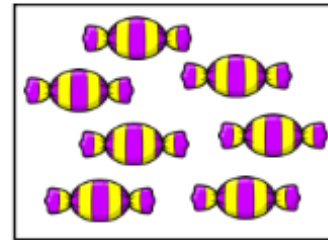
1



_____ sweets.



_____ sweets.




_____ sweets.


The smallest number of sweets is _____.

The greatest number of sweets is _____.


2



_____ apples.



_____ apples.

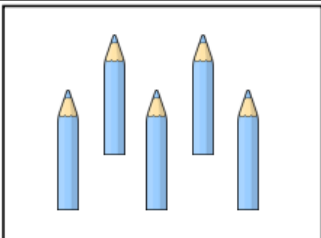


_____ apples.


The smallest number of apples is _____.

The greatest number of apples is _____.


3



_____ pencils.



_____ pencils.



_____ pencils.

The smallest number of pencils is _____.

The greatest number of pencils is _____.

_____ > _____ and _____ < _____

