



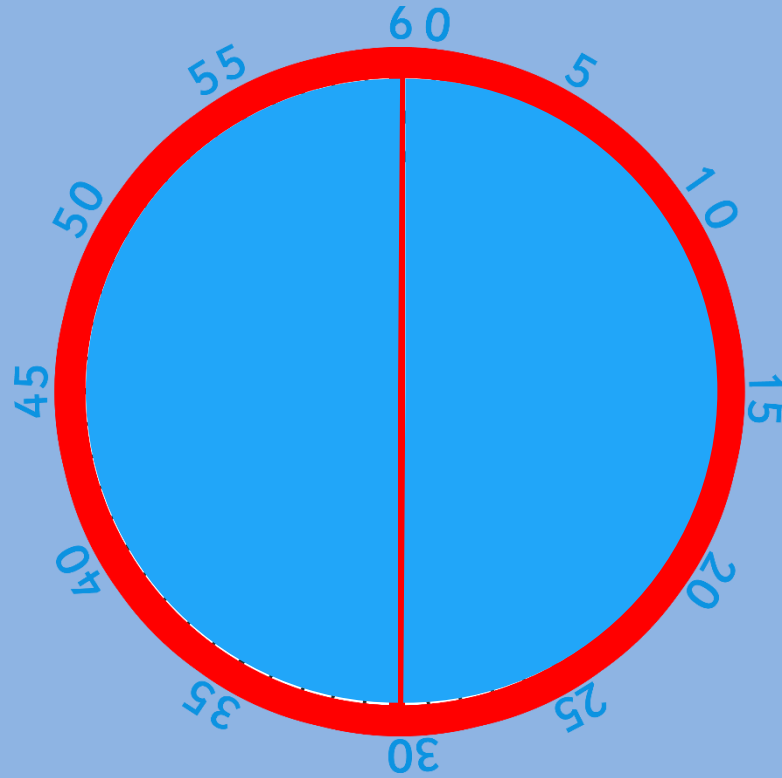
Tuesday 2nd March 2021

LO: to tell the time to half past the hour.

Questions

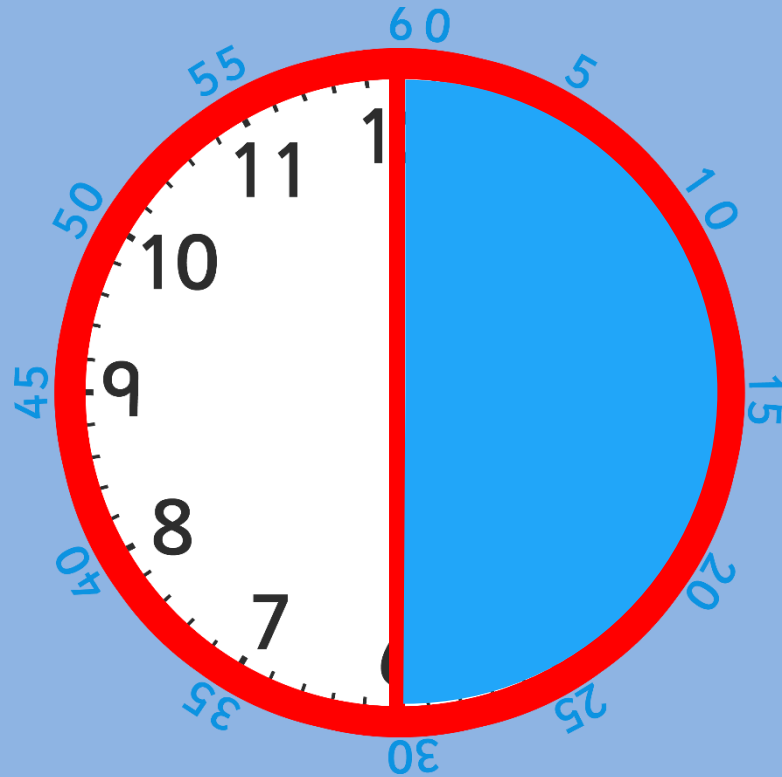
- How many seconds are there in a minute?
 - 60
- How many minutes are there in an hour?
 - 60
- How many minutes are there in half an hour?
 - 30
- How many days are there in a month?
 - 28-31
- How many days are there in a year?
 - 365

- A clock face is a full circle which is made up of 2 halves.

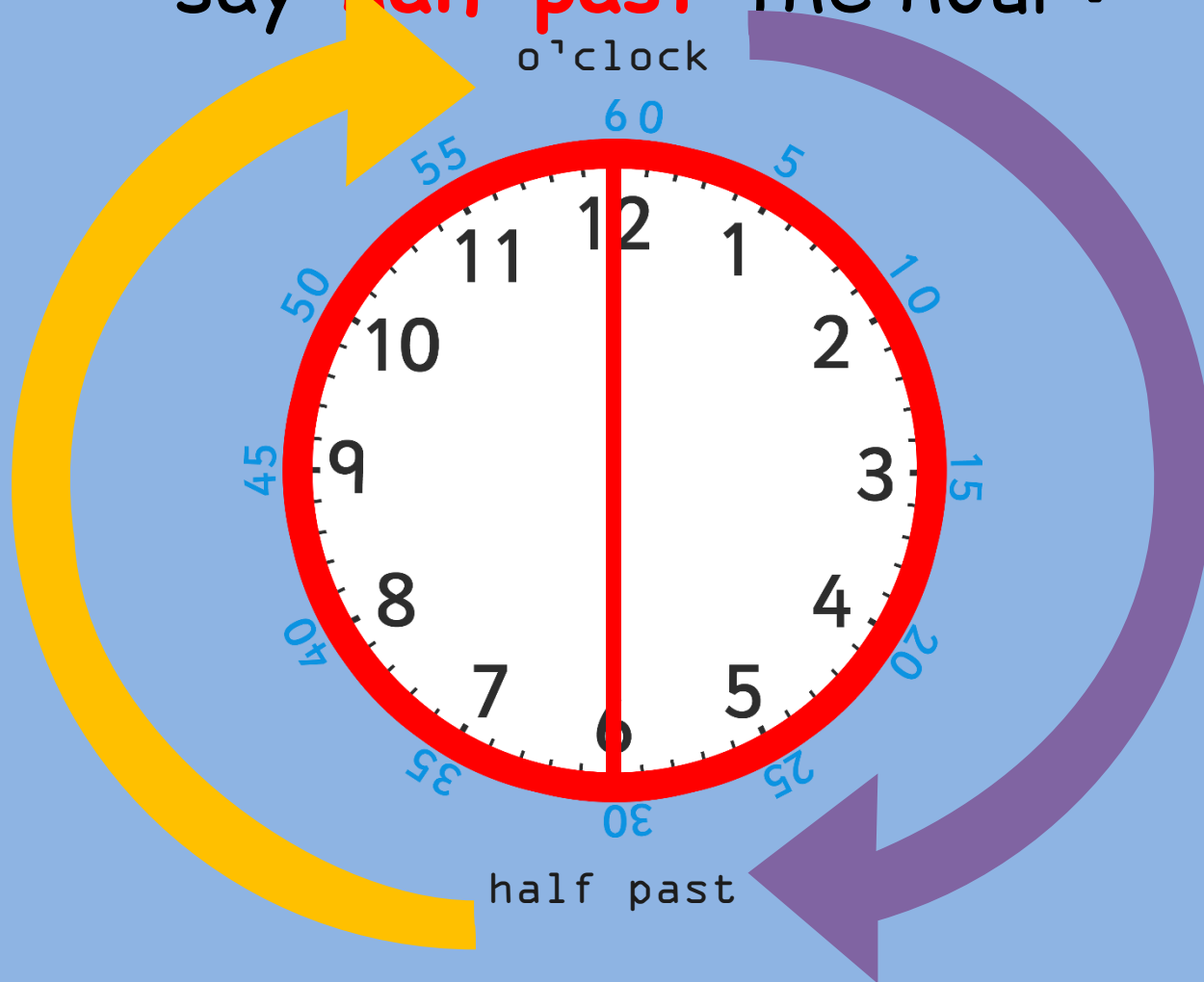


How many minutes make up half of an hour?

- There are 30 minutes in half of an hour.



- When it is 30 minutes past the hour we say '**half past**' the hour.



- Look at this time.
- The big hand is pointing at 6, which is halfway around the clock.
 - Where is the small hand pointing? Is it on the number?
 - It's half way between 1 and 2.



half past

- What time is this clock showing?

Where is the **big**
hand pointing?

6

half past 11

Where is the

little hand

pointing?

halfway between

11 and 12



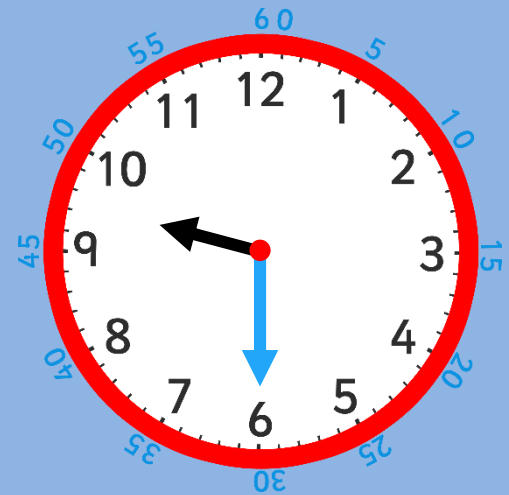
half past

- What do you notice about the small hand?
 - It is halfway between 3 and 4.
- What time is this clock showing?
 - Half past three.



half past

- Which clock is showing **half past 2**?
- Which clock is showing **half past 9**?
- Which clock is showing **half past 7**?



Your task:



Year 1:

Something easier: Complete the 'something easier' activity sheet. Match the times and clocks.

Main activity: complete the 'main activity' sheet. Read the clocks and record the times. Can you draw the hands on the clocks?

Something Harder extension: Complete the 'something harder' activity sheet. Have a discussion with a grown-up. Can you answer their questions?

Remember:

- when the minute hand is pointing to the 6 we say 'half past'.
- check where the hour hand has just gone 'past'.

