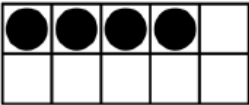
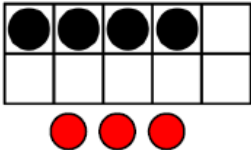
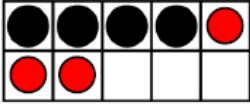
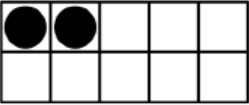
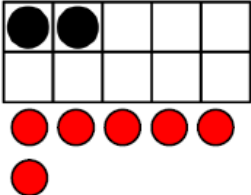
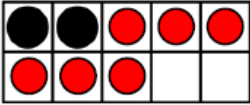
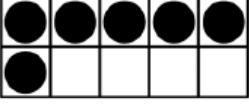
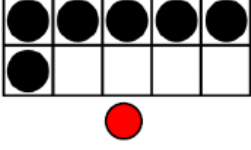
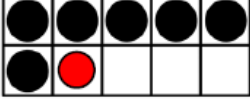


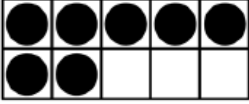
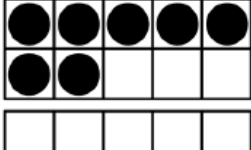

Use ten frames to help you fill in the missing numbers.

| First | Then | Now | |
|---|---|---|--------------------------------|
|  |  |  | First there were <u>4</u> . |
| | | | Then <u>3</u> more were added. |
| | | | Now there are _____. |

| First | Then | Now | |
|---|---|---|-----------------------------|
|  |  |  | First there were <u>7</u> . |
| | | | Then _____ more were added. |
| | | | Now there are _____. |

| First | Then | Now | |
|--|--|--|-----------------------------|
|  |  |  | First there were <u>2</u> . |
| | | | Then _____ more were added. |
| | | | Now there are _____. |

| First | Then | Now | |
|---|---|---|-----------------------------|
|  |  |  | First there were <u>6</u> . |
| | | | Then _____ more was added. |
| | | | Now there are _____. |

| First | Then | Now | |
|---|---|---|--------------------------------|
|  |  |  | First there were <u>7</u> . |
| | | | Then <u>4</u> more were added. |
| | | | Now there are _____. |
| | | | _____ + _____ = _____. |