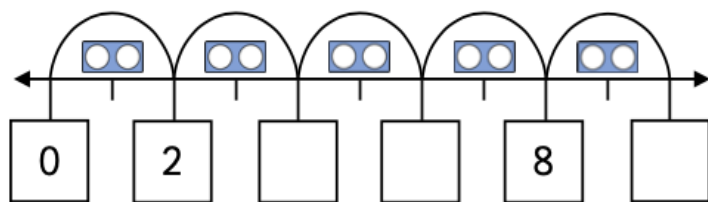


4.02.21

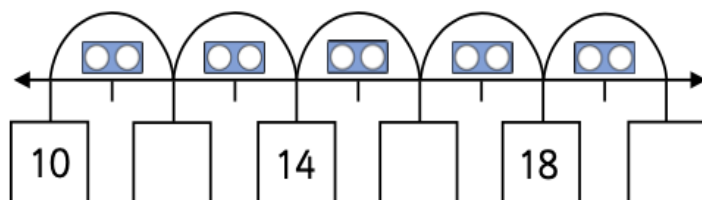
L.O: To count in multiples of 2.

Count in 2s to complete the numberlines.

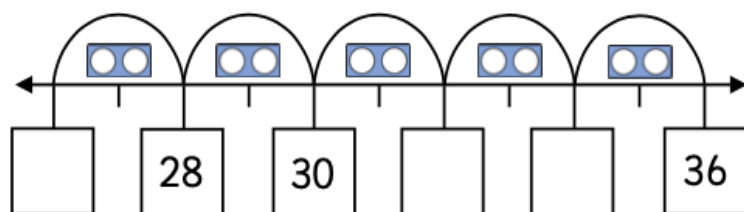
1.



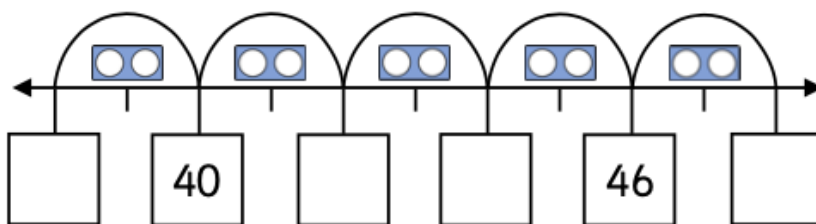
2.



3.



4.



Count how many objects there are, in 2s.

5.

How many flip-flops are there?



There are \_\_\_\_\_ flip-flops in total.

6.

How many cherries are there?



There are \_\_\_\_\_ cherries in total.