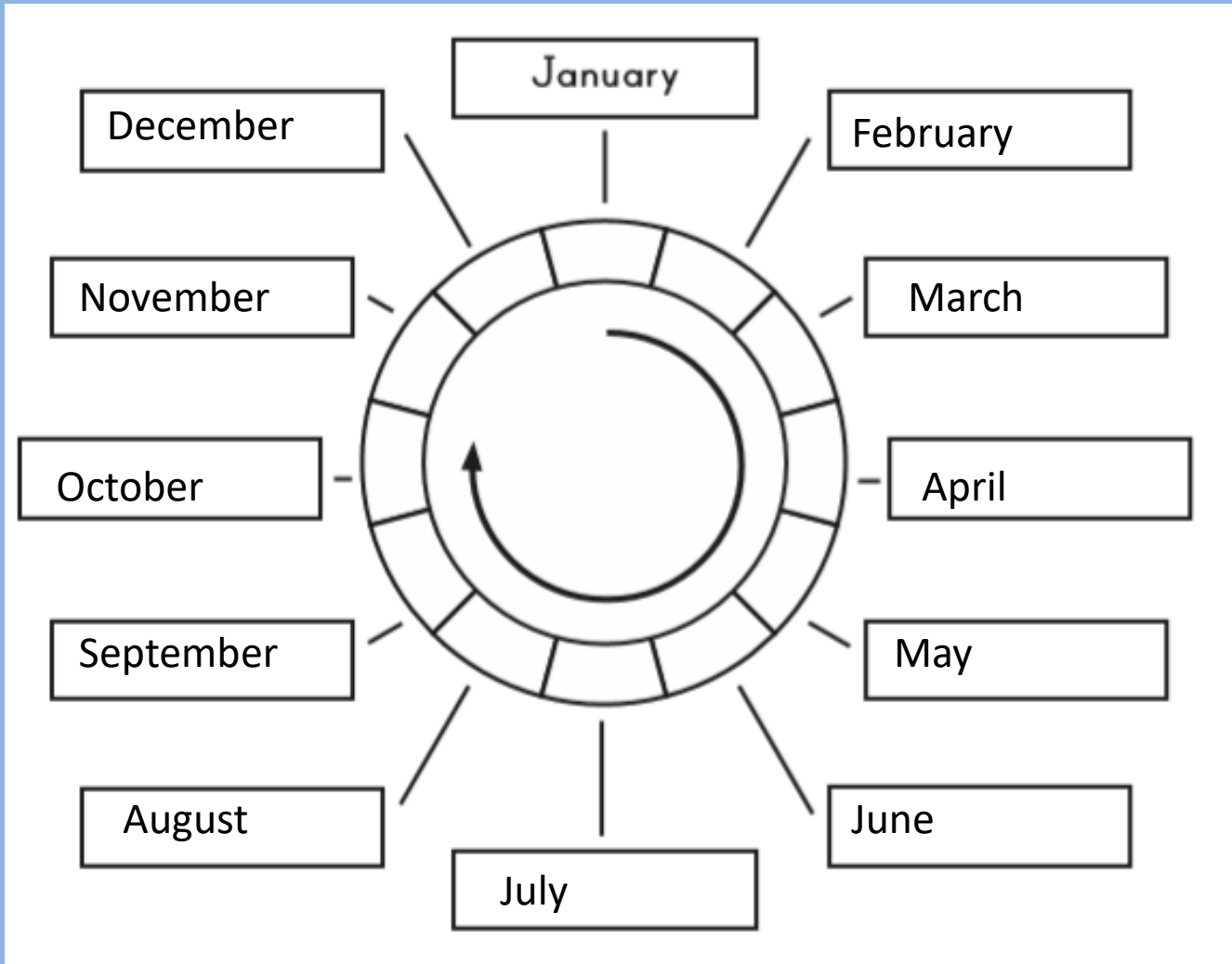




Thursday 4<sup>th</sup> March 2021

LO: to compare time.

# warm up



What's  
bigger?

# Units of time


seconds

minutes

hours

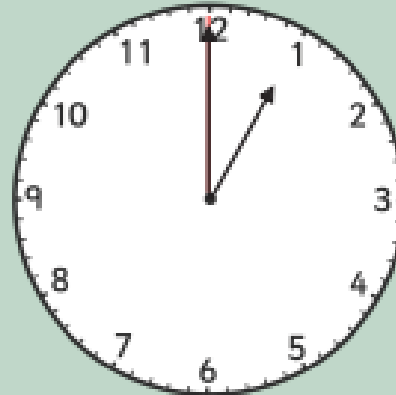
## Minute

1 minute = 60 seconds



## Hour

1 hour = 60 minutes



## Comparing time

**I** Tick the longest time in each set.

a)

1 minute

1 second

1 hour

b)

1 week

1 month

1 day

**3** Write  $>$ ,  $<$  or  $=$  to compare the times.

1 day  1 week


7 days  1 week

1 month  1 week



4 Three children ran a race.

Ron



65 seconds

Kim



53 seconds

Sam



60 seconds

Complete the sentences.

- a) \_\_\_\_\_ was the fastest.
- b) \_\_\_\_\_ was the slowest.
- c) \_\_\_\_\_ was faster than Sam.

# Your task:



## Year 1:

**Something easier:** complete the 'something easier' activity sheet. Compare the times.

**Main activity:** complete the 'main activity' sheets. Can you compare different amounts of time? Read the questions carefully.

**Something Harder extension:** complete the 'something harder' activity sheet.

